







Jakie liczby powinny być wpisane w puste kwiatki?



Pokoloruj obrazek według opisu.



26 – zielony

14 – żółty

25 – czerwony

11 – pomarańczowy

28 – niebieski

8 – fioletowy



Wykonaj działania. Wyniki wskażą ci kratki, w które trzeba wpisać litery umieszczone obok działań.  
Odczytaj hasło.

$16 + 14 = \square \rightarrow \text{A}$

$5 + 8 = \square \rightarrow \text{N}$

$19 + 9 = \square \rightarrow \text{C}$

$27 - 16 = \square \rightarrow \text{O}$

$16 + 10 = \square \rightarrow \text{D}$

$23 - 15 = \square \rightarrow \text{Ś}$

$17 + 6 = \square \rightarrow \text{E}$

$29 - 24 = \square \rightarrow \text{T}$

$12 + 9 = \square \rightarrow \text{H}$

$17 - 14 = \square \rightarrow \text{W}$

$25 - 8 = \square \rightarrow \text{I}$

$25 - 23 = \square \rightarrow \text{Y}$

$6 + 8 = \square \rightarrow \text{L}$

$29 - 29 = \square \rightarrow \text{Ż}$

26	11
----	----

--	--

11	26	3	30	0	13	2	28	21
----	----	---	----	---	----	---	----	----

--	--	--	--	--	--	--	--	--

8	3	17	30	5
---	---	----	----	---

--	--	--	--	--

13	30	14	23	0	2
----	----	----	----	---	---

--	--	--	--	--	--